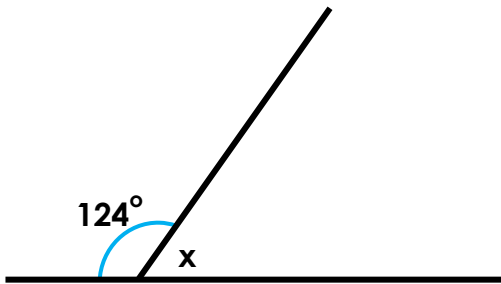


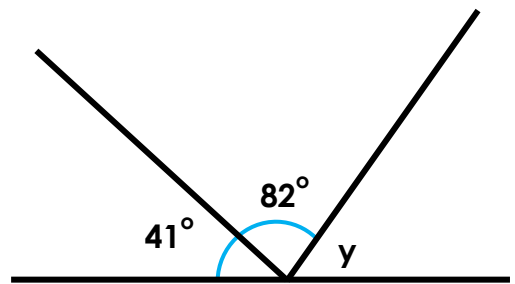
Angles on a Straight Line

1. True or false? Both angles x and $y = 57^\circ$.

A.



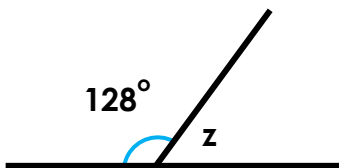
B.



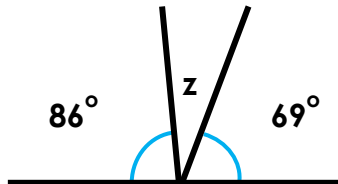
Angles not drawn to scale

2. Which diagram has a missing angle of 22° ? Put an 'X' in the correct box.

A.

☐

B.

☐

C.

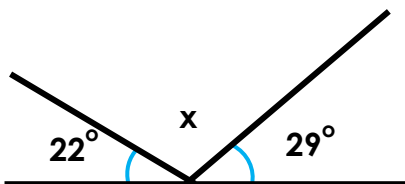
☐

Angles not drawn to scale

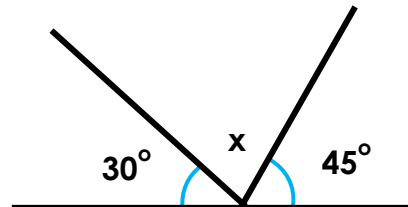
3. Florence thinks that her missing angle is bigger than Freya's.



Florence



Angles not drawn to scale



Freya

Is she correct? Explain your answer.