

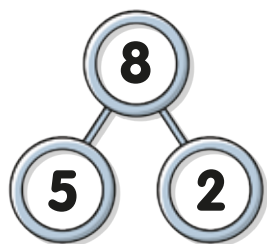
Number

Bonds


To 8

Talk

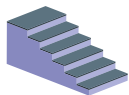
Which is the correct sentence below?
Talk about it with your grown-up.



5 is a part, 2 is a part,
8 is the whole.



5 is a part, 3 is a part,
8 is the whole.



Can you think of any more
number pairs that together
make 8?

Explore

Number Bond Eye Spy.

Can you find a number 1 in your home or out
and about?

'Eye spy with my
little eye number 1'



Now your partner must go on
the hunt to find number 7.

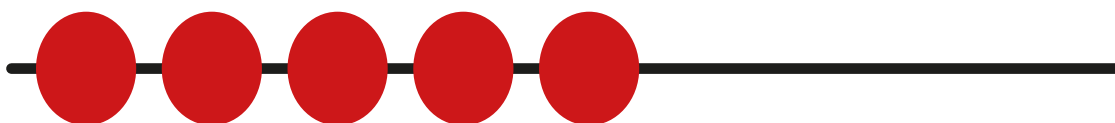


Take it in turns to play this game to find
numbers that make up the number bonds to 8.

0+8 1+7 2+6 3+5 4+4 5+3 6+2 7+1 8+0

Draw

Draw the bead strings so there are 8 beads in total.
Using the drawing, complete the number bond sentence below.



= 8

$$5 + \square = 8$$