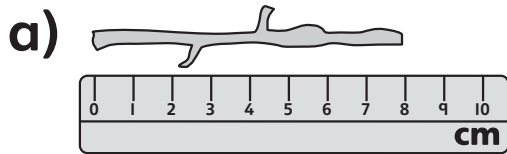
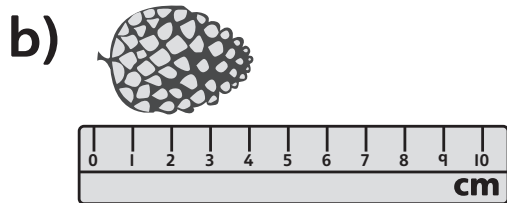


# Measuring in centimetres



1 Complete the sentences.

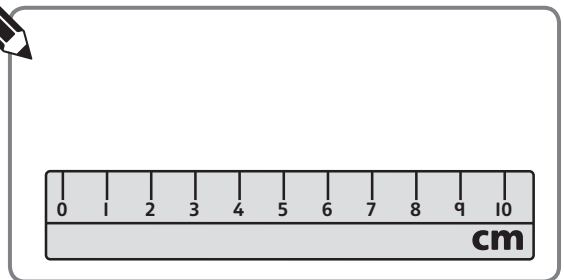


The  is  cm long.



The  is  cm long.

c) Draw something shorter than  but longer than the .



These rulers are not real rulers, so the centimetres are not quite the correct length.



2 Complete the sentences.



c)  cm is greater than  cm.