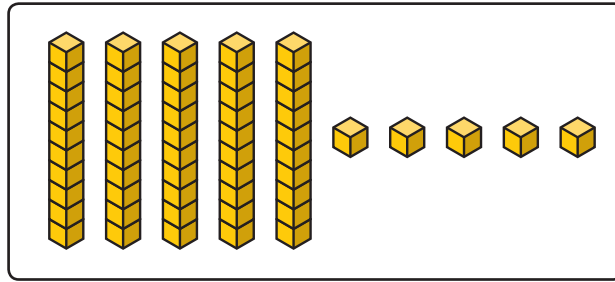
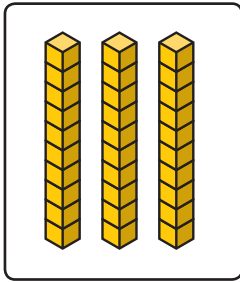
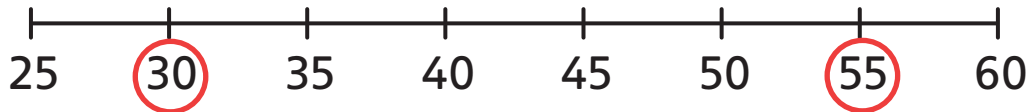


Think together

I _____ is 55 cm. Which bone is shorter,

_____ or _____ ?



I will compare the tens.

You can use a number line to help you compare.

30 is _____ than 55.

30  55

The _____ bone is shorter.

Thigh bone 

Shin bone 

Leg bone 

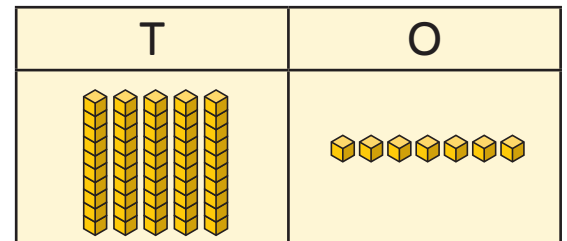
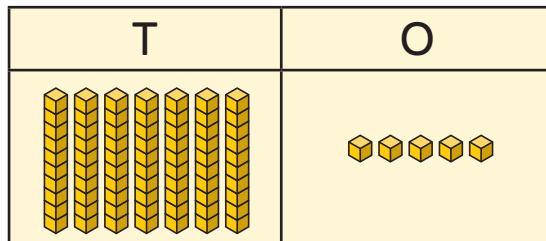
2 Use $<$, $>$ or $=$ to compare these amounts.

a)

\longleftrightarrow
75 cm



\longleftrightarrow
57 cm



b)

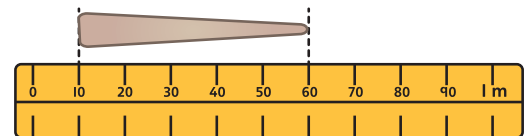
\longleftrightarrow
20 cm



\longleftrightarrow
2 m

c)

\longleftrightarrow
50 cm



3 Daisy has an object that is 40 cm tall.

Find and measure three things taller than it and three things smaller than it.

CHALLENGE

My ruler only goes up to 30 cm. I wonder if there is something else I can use.

