


Think together

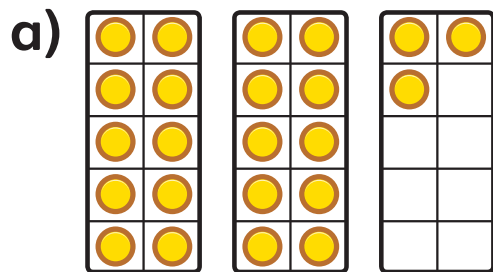
1 How many  are there in total?



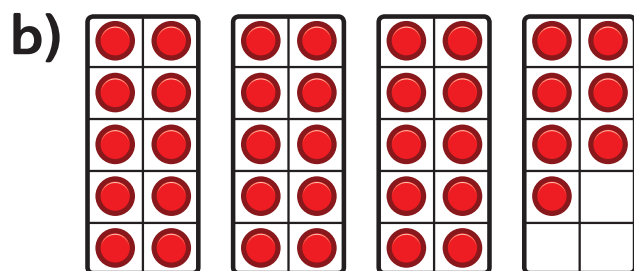
There are  in total.

is tens and ones.


2 Write the numbers that the counters show.



tens and ones is .



tens and ones is .



tens and ones is .

3 Look at the table below for the number 28.



	2 tens and 8 ones	28
--	----------------------	----

Make your own table for the number 34.