

























Which shapes are the odd ones out?

Answers:

- 1) B - it has 4 sides
- 2) C - it has 4 sides
- 3) A - it has 4 sides
- 4) C - it has 5 sides
- 5) A - it has 5 sides
- 6) D - it has 7 sides

2-D Shapes (Odd One Out)



<p>1). Which shape is the odd one out?</p> <p>A  B </p> <p>C  D </p> <p>Explain your answer.</p>	<p>2). Which shape is the odd one out?</p> <p>A  B </p> <p>C  D </p> <p>Explain your answer.</p>
<p>3). Which shape is the odd one out?</p> <p>A  B </p> <p>C  D </p> <p>Explain your answer.</p>	<p>4). Which shape is the odd one out?</p> <p>A  B </p> <p>C  D </p> <p>Explain your answer.</p>
<p>5). Which shape is the odd one out?</p> <p>A  B </p> <p>C  D </p> <p>Explain your answer.</p>	<p>6). Which shape is the odd one out?</p> <p>A  B </p> <p>C  D </p> <p>Explain your answer.</p>