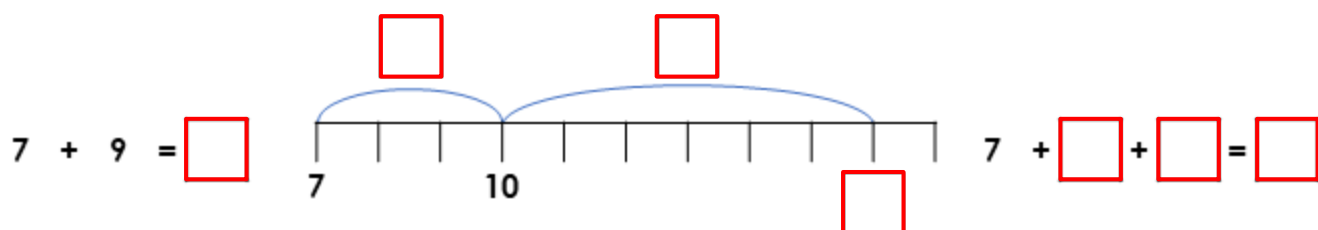
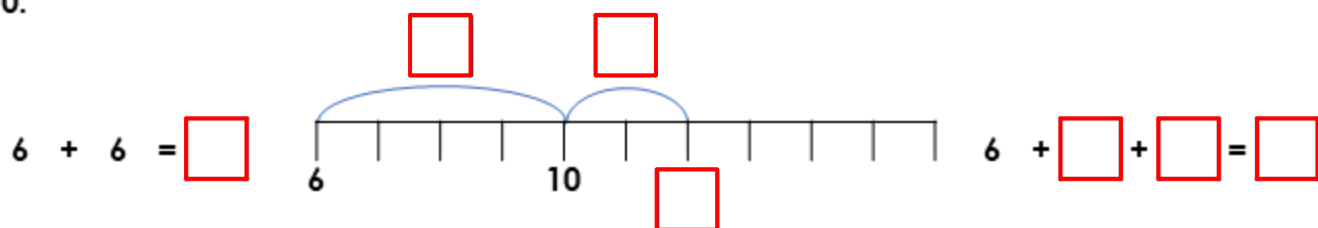
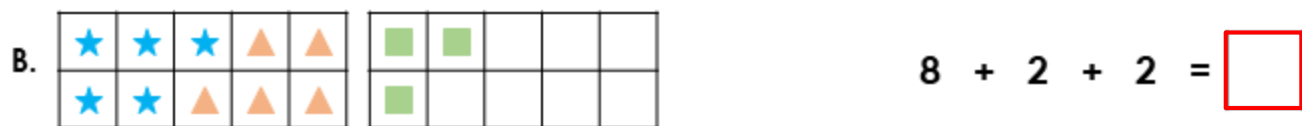


Add by Making 10

1. Complete the number lines and calculations to show how you can add by making 10.



2. Match the ten frames to the correct calculations and complete the answers.



3. Jordan and Sally are solving the calculation $6 + 9$. They must add by making 10.



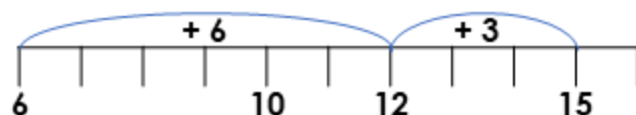
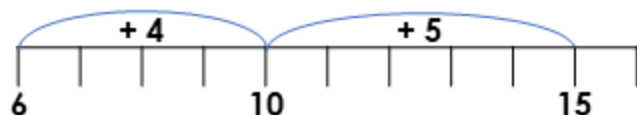
Jordan

I partitioned 9 in to 4 and 5.
So I calculated $6 + 4 + 5 = 15$.



Sally

I partitioned 9 in to 6 and 3.
So I calculated $6 + 6 + 3 = 15$.



Who is correct? Explain why.