

# Tenths

1. Magnus eats  $\frac{4}{10}$  of a pizza and Lucy eats  $\frac{3}{10}$  of the same pizza.

He says,

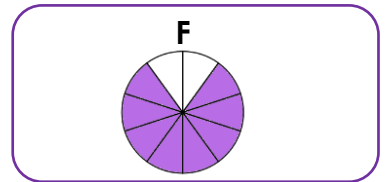
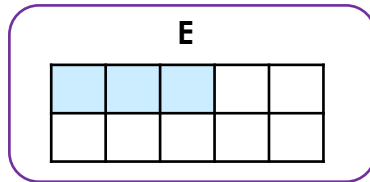
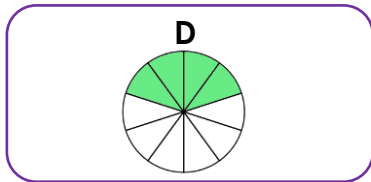
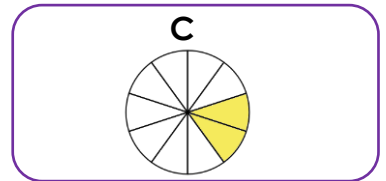
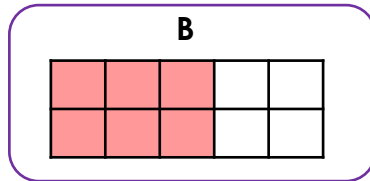
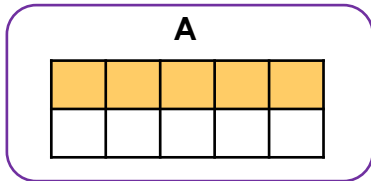


Magnus

Altogether, we have eaten  $\frac{7}{10}$ .

Is Magnus correct?

2. Brendan has made a representation of  $\frac{3}{10}$ .



Which representation belongs to Brendan?

3. Lucy has made a pyramid of tenths. Each fraction shown in a rectangle is the sum (total) of the fractions in the two rectangles below. Complete the fractions.

