

# Halloween Fact Family Challenges.

10 

1. Can you draw 10 halloween items?

2. How many more spider's webs do you need to draw to make 10?



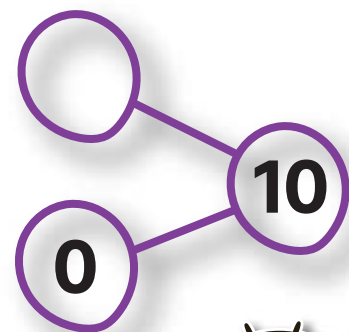
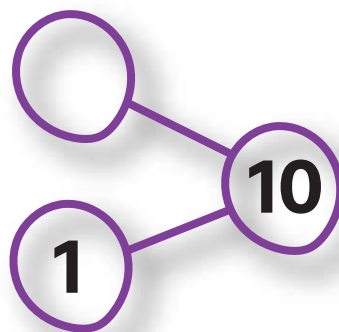
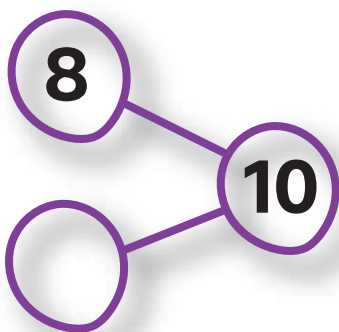
$$3 + \underline{\quad} = 10$$

3. I start with 10 pumpkins but I use 5 in a pumpkin pie.  
How many do I have left?



$$10 - \underline{\quad} = 5$$

4. Complete the part-part-whole models.



4 + 6 is the same as 6 + 4.



5. Do you agree or disagree? Why?

# Halloween Fact Family Challenges.

20 

1. How many more pumpkins do you need to draw to make 20?



$$14 + \underline{\quad\quad} = 20$$

2. Complete the number sentences.

$$8 + \underline{\quad\quad} = 10$$

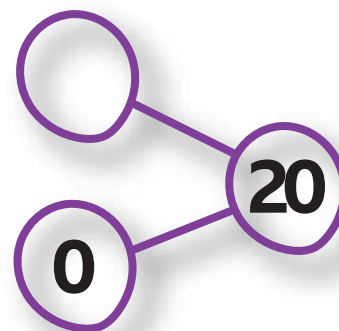
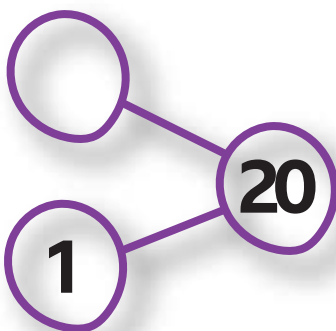
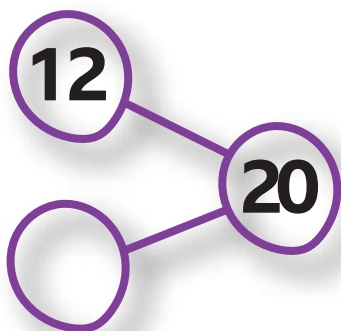
$$8 + \underline{\quad\quad} = 20$$

$$18 + \underline{\quad\quad} = 20$$

What do you notice?



3. Complete the part-part-whole models.



5. Is the sentence true or false? How do you know?

$$5+15 = 7+13$$

---

---

---