

Counting in 2s

1 How many  are there?

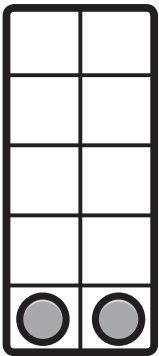


There are .

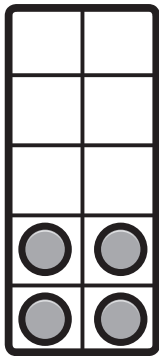
2 Complete the

--	--	--	--

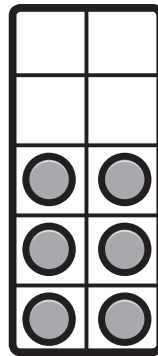
 and write which numbers come next.



2



4



6

