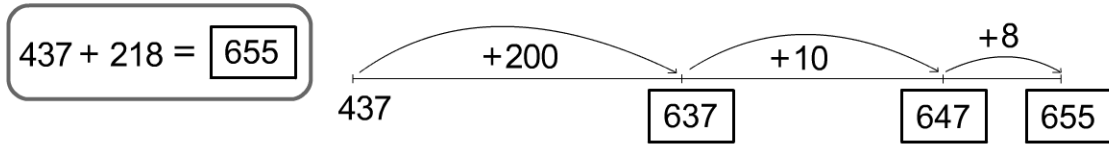




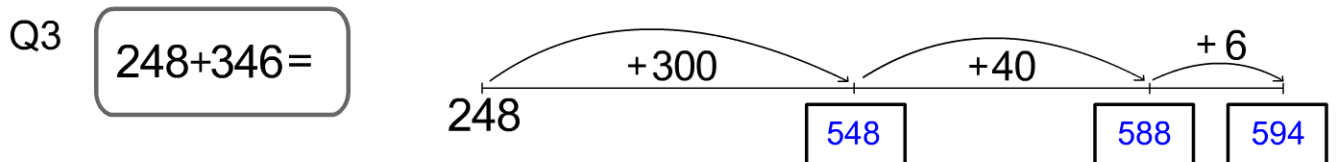
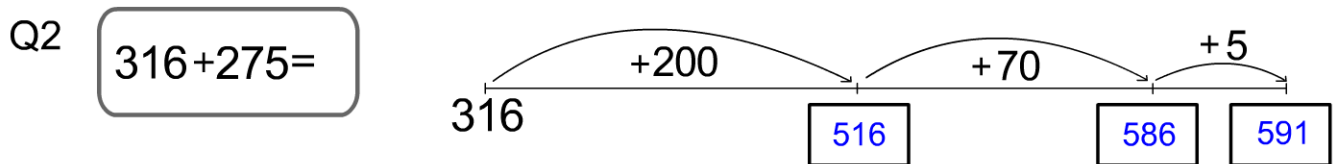
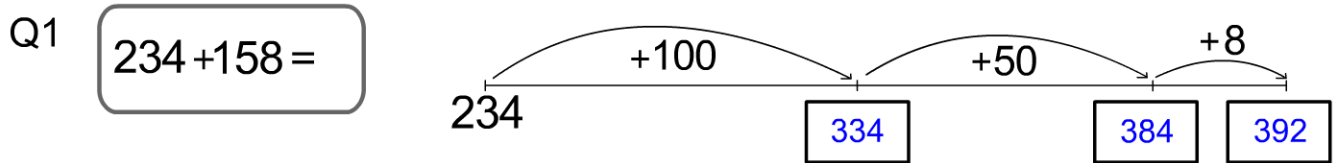
Pencil and Paper - addition

When adding numbers like these, add the Hundreds first, then the Tens, then the Ones.

You can use a number line to help record these steps.



Use the same method to answer these questions.



Answer these questions using the same method. Try doing it in your head, or use a piece of rough paper if you need one.

Q4 $134 + 246 = 380$

Q5 $247 + 216 = 463$

Q6 $368 + 228 = 596$

Q7 $324 + 283 = 607$

Q8 $492 + 217 = 709$

Q9 $563 + 365 = 928$