


## 2-D Shapes (Odd One Out)




1). Which shape is the odd one out?

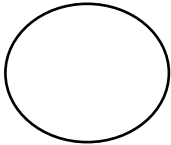
A




B



C



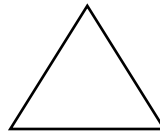
D



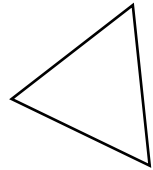
Explain your answer.

2). Which shape is the odd one out?

A



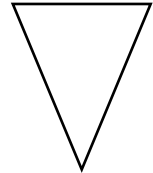
B



C



D

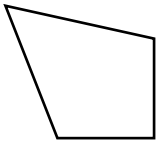


Explain your answer.

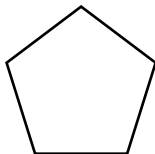


3). Which shape is the odd one out?

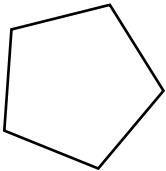
A



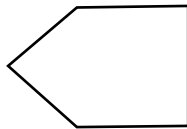
B



C



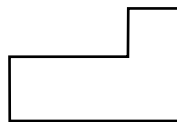
D



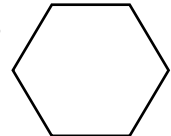
Explain your answer.

4). Which shape is the odd one out?

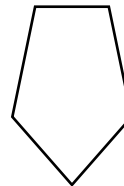
A



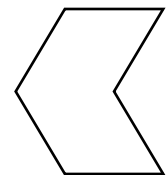
B



C



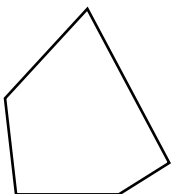
D



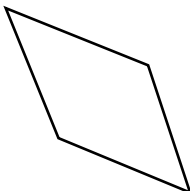
Explain your answer.

5). Which shape is the odd one out?


A




B



C



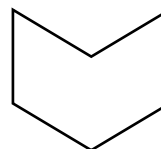
D



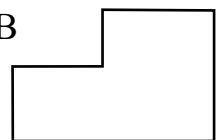
Explain your answer.

6). Which shape is the odd one out?

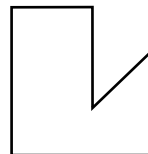
A



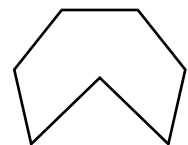
B



C



D



Explain your answer.