


# SHARING EQUALLY

1

Tick the drawings that show equal sharing.



2


Share 20 equally between 2.



20 shared between 2 is **10**

There are 10 dots in each box

Share 20 equally between 10.



20 shared between 10 is **2**




There are 2 dots in each box



Explain to an adult what you notice.

3

Draw 20 dots shared equally between 5.



20 shared between 5 is

4

Use your last answer to help you with this one...

20 shared between 4 is

5

4

True or false?

60 shared between 6 is 10

T



F



35 shared between 5 is 6

T



F



22 shared between 2 is 12

T



F



5

At an **AWESOME** concert,  
**18** swag bags are given to **2** lucky fans.

At a **BRILLIANT** concert,  
**18** swag bags are given to **9** lucky fans.

**TAMMY SAYS**

Fans at the  
**BRILLIANT**  
concert get more swag!

**TERRELL SAYS**

Fans at the  
**AWESOME**  
concert get more swag!

Terrell is right because Awesome fans get 9 bags each compared to 2 bags each for Brilliant fans.

Explain to an adult who you think is correct (Tammy or Terrell) and why.