









MULTIPLYING AND DIVIDING BY 0 AND 1

1





Draw a line to match each array with the correct number sentence.

Connections: The first empty array connects to 4 x 1. The array with 3 dots connects to 1 x 3. The array with 4 dots connects to 4 x 0. The array with 6 dots connects to 2 x 3.

Draw the missing array:

	
---	--

Connection: The number sentence 2 x 1 connects to the empty array box.

2



A rock concert lasts 4 hours. Each band performed for 1 hour.

How many bands performed at the concert?

$$4 \div 1 = 4$$

Now complete the number sentence if 1 band had performed the entire concert:

$$4 \div 4 = 1$$

3



Hayley has a **10** coin.

Draw how many **1** coins Hayley's coin is worth.



4



Complete the missing numbers.

$$5 \times 1 = 5$$

$$5 \div 1 = 5$$

$$1 \times 12 = 12$$

$$8 \div 8 = 1$$

$$1 \times 7 = 7$$

$$11 \div 1 = 11$$

5



Complete Ziggy's quote.



WHEN YOU MULTIPLY
A NUMBER BY ZERO
THE ANSWER IS
ALWAYS ZERO



Explain to an adult why this is true.