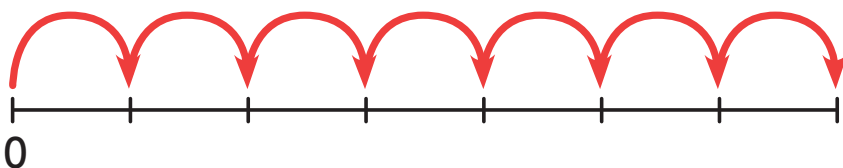


Think together

1 How many  are there in 7 tubes?

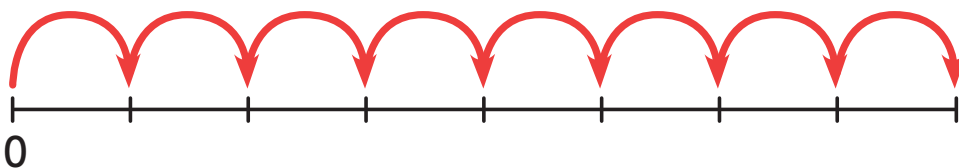
1	2	3	4	5	6	7	8	9	10
11	12	13	14	15	16	17	18	19	20
21	22	23	24	25	26	27	28	29	30
31	32	33	34	35	36	37	38	39	40
41	42	43	44	45	46	47	48	49	50



There are  in 7 tubes.

2 How many  are there in 8 tubes?

1	2	3	4	5	6	7	8	9	10
11	12	13	14	15	16	17	18	19	20
21	22	23	24	25	26	27	28	29	30
31	32	33	34	35	36	37	38	39	40
41	42	43	44	45	46	47	48	49	50

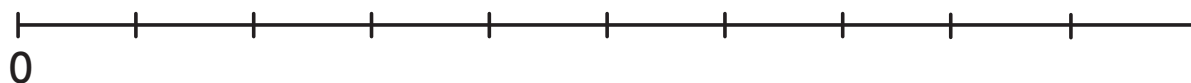


There are  in 8 tubes.

3 How many  are there in 9 tubes?

How many  are there in 10 tubes?

1	2	3	4	5	6	7	8	9	10
11	12	13	14	15	16	17	18	19	20
21	22	23	24	25	26	27	28	29	30
31	32	33	34	35	36	37	38	39	40
41	42	43	44	45	46	47	48	49	50



There are  in 9 tubes.

There are  in 10 tubes.

Would I need to write all the numbers in? I can see a pattern from earlier. I think I know where the numbers go.

