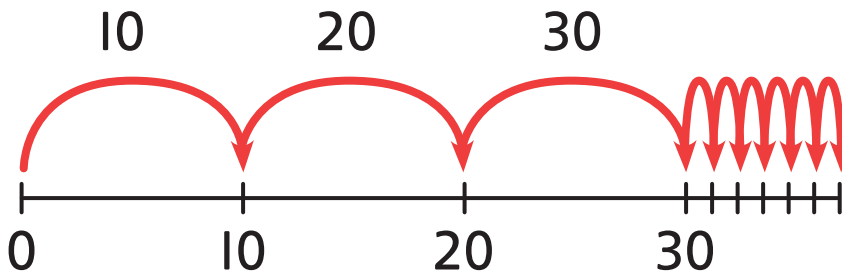



# Think together

1 How many  are there?



There are  .

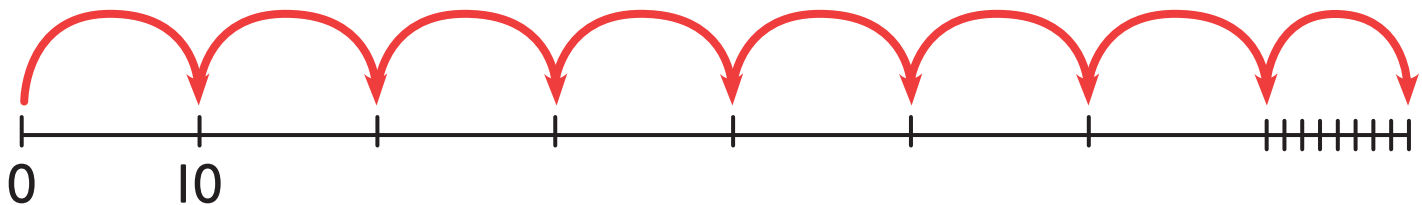


It's difficult to fit all these jumps on the number line.

I think I could count the ones all in one go.



2 How many  are there?



There are  .

3 Find the mistakes.

There are 67 sweets in total.

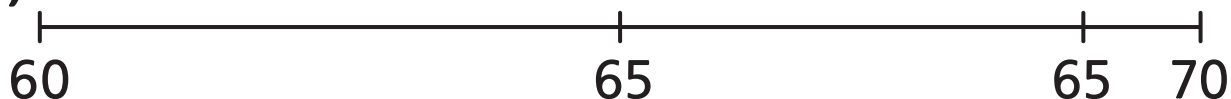
a)



b)

50	51	53	54	55	56	57	58
----	----	----	----	----	----	----	----

c)



I think there is a number missing from the number track.

I think there is a mistake in each one.

