


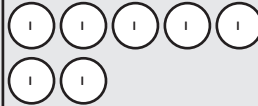



# Adding and subtracting Is, 10s, 100s, 1,000s



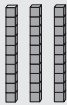


1 Solve these calculations.

a)

Th	H	T	O
			
			





$$4,137 + 2 = \boxed{\phantom{000}}$$

b)

Th	H	T	O
			
			

$$4,137 + \boxed{\phantom{000}} = \boxed{\phantom{000}}$$

2 Work out the missing numbers.

Th	H	T	O
			

a)  $6,666 + 2 = \boxed{\phantom{000}}$

d)  $6,666 - 200 = \boxed{\phantom{000}}$

b)  $6,666 + 20 = \boxed{\phantom{000}}$

e)  $6,666 = \boxed{\phantom{000}} - 200$

c)  $2,000 + 6,666 = \boxed{\phantom{000}}$