





Draw Accurately

1. Measure these lines to the nearest mm. Which line is the odd one out?

A	
B	
C	
D	

2. All the lines below have been ordered from shortest to longest. Draw lines B and D. to complete them and then write the measurements for all the lines in the boxes.

A 

cm mm

B

cm mm

C 

cm mm

D

cm mm

E 

cm mm

3. Jack has been measuring some lines. Is he correct? Explain how you know.



All of my lines are longer than 3cm 5mm but shorter than 7cm 5mm.

