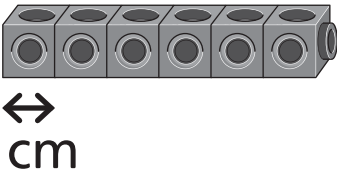
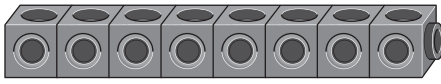




Comparing lengths

1 Tick the longer total distance.

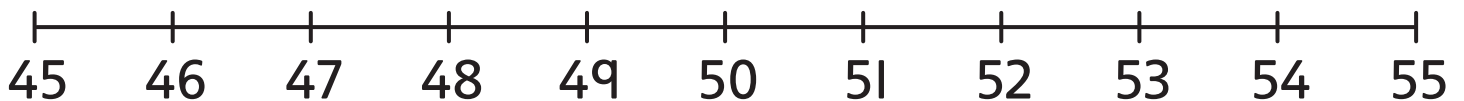
a)  ☐  ☐

b)  ☐  ☐

c) 45 m ☐ 44 m ☐

2 A bin is 52 cm tall. A stool is 48 cm tall.

Which is taller?



52 48

The _____ is taller than the _____ .