







Recognise and Use Thousandths

1. **A. 0.130 and 0.13; B. 0.032; C. 3.007**

2. **A. 2.06**

1s	10ths	100ths	1000ths
			

B. 1.005

1s	10ths	100ths	1000ths
			

3. **Hanna has converted B and C incorrectly. B should be 3.052; she has written 5 tenths and 2 hundredths instead of 5 hundredths and 2 thousandths. C should be 1.004; she has written 4 tenths instead of 4 thousandths.**