



Electricity

1. **Cut out the pictures** below.
2. Now put them in the **correct order**, from electricity being generated to it powering appliances at home.




The electrical appliance works



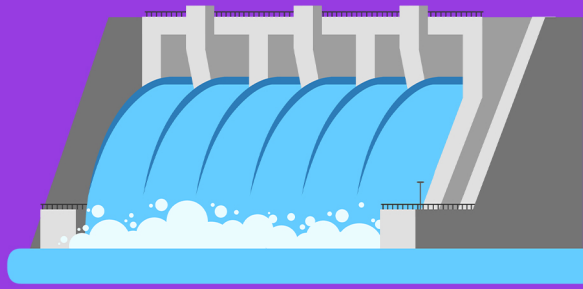
Electricity travels through wires inside the walls



Electricity travels along wires or cables to the building



Electricity reaches the plug socket or appliance



Electricity is generated in a power station

