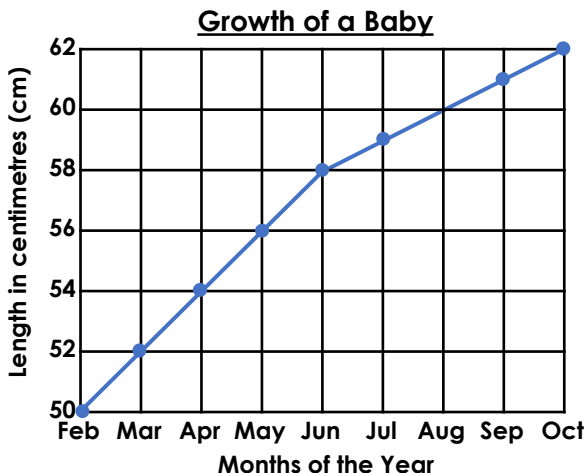


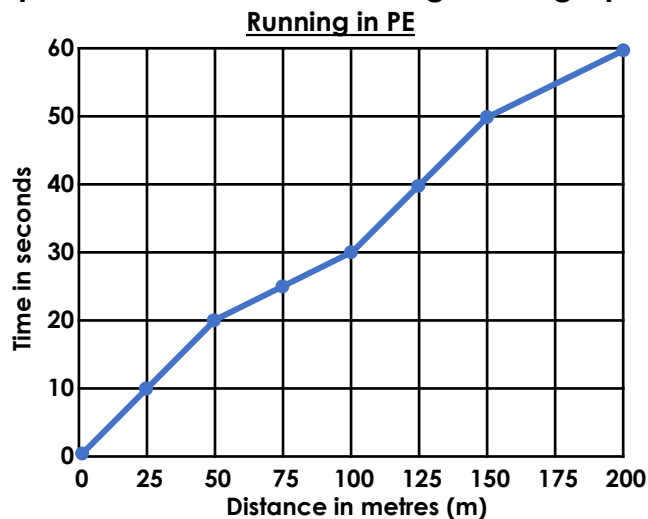
# Line Graphs

1. Use the line graph below to answer the following questions about the growth of a new born baby over 9 months.



- A. How long was the baby in April?
- B. When was the baby 59cm long?
- C. How many centimetres did the baby grow between March and September?
- D. What was the difference between the length of the baby in May and October?

2. Tara has been timing herself in PE when running for 60 seconds. Complete the questions and answers using Tara's graph.

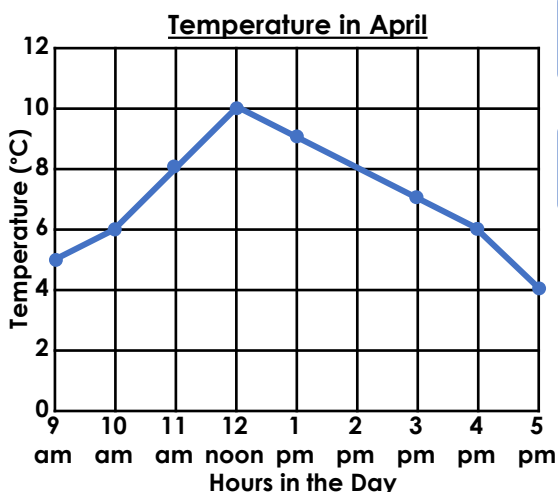


A. How much further did Tara run in the final 10 seconds than in the first 10 seconds?

B. Was Tara faster running 50 to 75 metres or 100 to 125 metres?

C.

3. Some children recorded the temperature in April. Which story matches the line graph below? Explain your answer.



Max took the temperature at 9am, by 5pm it had decreased by 1 degree.

Pearl took the temperature at 9am, by 3pm it had decreased by 1 degree.

Emily took the temperature at 9am, by 1pm it had increased by 5 degrees.

Maya took the temperature at 10am, by 5pm it was 1 degree less.